





Subtraction - With Symbols

Add the shapes and answer the equation




$$4 - 1 = \dots\dots\dots$$



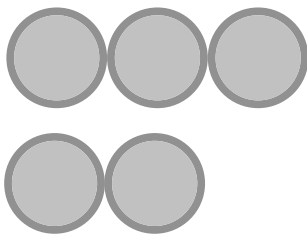
$$7 - 3 = \dots\dots\dots$$




$$6 - 3 = \dots\dots\dots$$



$$8 - 5 = \dots\dots\dots$$



$$5 - 2 = \dots\dots\dots$$



$$8 - 7 = \dots\dots\dots$$